







ANGLES

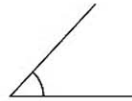
Types of angles:

				
Acute < 90°	Obtuse > 90°	Right = 90°	Reflex >180°	Straight = 180°

Instructions: Name each angle as acute, obtuse, right, reflex, or straight.



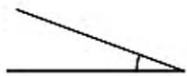
angle: _____



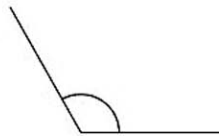
angle: _____



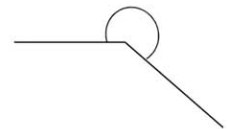
angle: _____



angle: _____



angle: _____



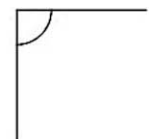
angle: _____



angle: _____



angle: _____



angle: _____